

Q1: Write the addition sentence and the answer:-



There are **2** orange fish and **3** blue fish.
How many fish are there in total?

The addition sentence: The answer:

Q2: Circle the biggest number:-

7

5

10

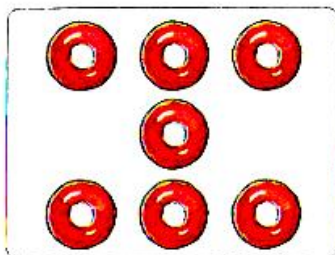
Q3: Circle the smallest number:-

1

5

3


Q4: Count and circle the number:-



5 6 7



2 3 4




4 5 6

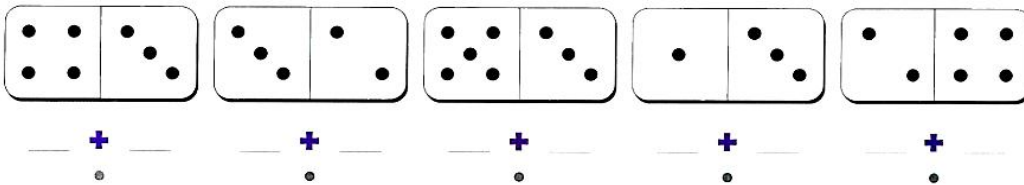


0 1 2

Q5: Which picture shows $5 + 3$:-



Q6: Count the dots, write the numbers and match:-



8

7

6

5

4

Q7: Complete the words:-



1st

t f s r i



5th

i f t h f

Q8: Write the missing number:-

