

Q1: Choose the correct answer:-

- a) $7 - 3 = \dots\dots\dots$ (4 or 5 or 6)
- b) $2 + 8 = \dots\dots\dots$ (8 or 9 or 10)
- c) 3 is $\dots\dots\dots$ 7 (bigger than or smaller than)
- d) 7 is smaller than $\dots\dots\dots$ (6 or 7 or 8)
- e) 5 and $\dots\dots\dots$ make 8 (2 or 3 or 4)
- f) 10 and 4 makes $\dots\dots\dots$ (13 or 14 or 15)

Q2: Measure the length of each object:-








The length is : _____ 




The length is : _____ 

Q3: Look at the picture and complete:-

Left     Right

 is the _____ from the right.

 is the _____ from the left.

Q4: Write the numbers and the total:-



Total

_____ and _____



Total

_____ and _____

Q5: Answer the questions:-

- 1) Which has the most?
- 2) Which has the least?
- 3) Which shapes have the same number?
.....
- 4) How many circles are there?
.....
- 5) How many squares are there?
.....

Triangles	Circles	Squares	Stars

Q6: Arrange from the tallest to the shortest

